

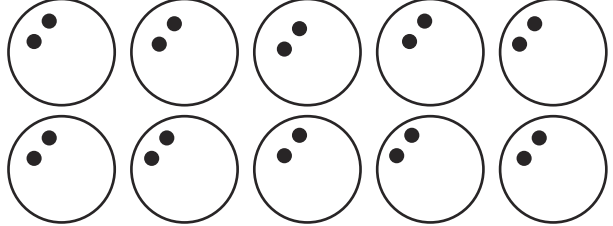

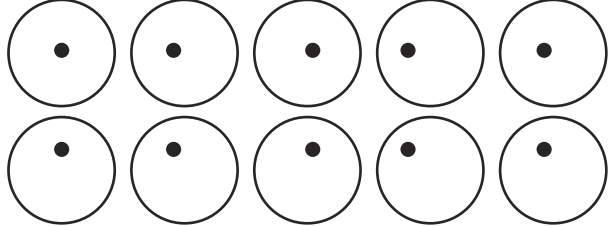



Missing Numbers Answers

Fill in the missing numbers. Use grouping circles to help you. The first one has been done for you.

$3 \times \boxed{5} = 15$	
$4 \times \boxed{2} = 8$	
$10 \times \boxed{2} = 20$	
$\boxed{5} \times 5 = 25$	
$\boxed{1} \times 10 = 10$	
$\boxed{7} \times 5 = 35$	
$\boxed{6} \times 2 = 12$	